



Louisville Academy's 3rd Grade News

January 22-26, 2024

	<p>Please be sure that you are reading with your child at least 15 minutes each night. This can be child reading, adult reading, or shared reading.</p>		
<p>Reading</p>	<p><u>Shared Reading</u>: Continue "Edward Tulane"</p> <p><u>Focus Strategies</u>: Opinion Writing</p> <p><u>Grammar Skill</u>: Dictionary Skills</p>		
<p>Phonics Inflectional Endings</p>	<p><u>Drop final e</u></p> <p>1.) hide - hid<u>ing</u></p> <p>2.) shake - shak<u>ing</u></p> <p>3.) write - writ<u>ing</u></p> <p>4.) tiptoe - tiptoe<u>d</u></p>	<p><u>Change y to i</u></p> <p>5.) bury - bur<u>ied</u></p> <p>6.) simply - simplif<u>ied</u></p> <p>7.) study - stud<u>ied</u></p> <p>8.) carry - carr<u>ied</u></p>	<p><u>Double final consonant</u></p> <p>9.) bob - bob<u>bed</u></p> <p>10.) hum - hum<u>ming</u></p> <p>11.) swim - swim<u>ming</u></p> <p>12.) flip - flip<u>ped</u></p>
<p>Social Studies</p>	<p>Continue European Explorers Unit</p>		
 Math	<p><u>Adding and Subtracting up to 10,000</u> —Remember division is A LOT easier for them if they are fluent with their multiplication facts, so continue to practice them nightly with your children 0-12's</p>		
<p>Important Information</p>	<p>Thurs. Jan. 25th- 3rd-5th grade Math Night 5:00-6:00 <i>(info on dojo)</i></p> <p>Mon. Feb. 6th-Progress Reports</p> <p>Fri. Feb. 15th-Early Release</p> <p>Fri 16-Mon. Feb. 19th- President's Day-NO SCHOOL</p>		

Math homework on the back
→

Name _____

Week #14

Day 1

$30 \times 2 = \underline{\hspace{2cm}}$

$30 \times 3 = \underline{\hspace{2cm}}$

$30 \times 4 = \underline{\hspace{2cm}}$

Round each number to the nearest 10. Then, add.

678 + 179 is about

$5 \times 0 = \underline{\hspace{2cm}}$

$1 \times 4 = \underline{\hspace{2cm}}$

$6 \times 7 = \underline{\hspace{2cm}}$

Ingrid is watching 2 spiders crawling on the sidewalk. The fuzzy spider crawls 3 times as far as the brown spider. The brown spider crawls 4 feet. How many feet does the fuzzy spider crawl?

Day 3

$5 \times 3 = 15$

Write a related multiplication sentence.

$424 + 302 =$

Anna mailed 10 invitations for her birthday party. She placed 4 stickers on the back of each invitation. How many stickers did she place on the invitations in all?

$5 \times 4 = \underline{\hspace{2cm}}$

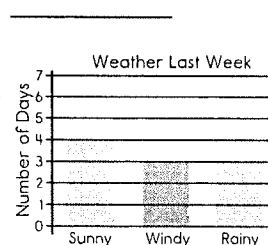
$3 \times 8 = \underline{\hspace{2cm}}$

$9 \times 2 = \underline{\hspace{2cm}}$

Complete the table. $504 + 298 =$

Multiply by 3	
3	9
4	
5	
6	

What was the weather mostly like last week?



Which addition sentence is the same as 6×3 ?


- A. $6 + 6$
- B. $3 + 3 + 3 + 3 + 3 + 3$
- C. $6 + 6 + 6$
- D. $3 + 3 + 3$

$4 \times \underline{\hspace{2cm}} = 32$

$\underline{\hspace{2cm}} \times 9 = 36$

$2 \times 4 = \underline{\hspace{2cm}}$

What time is shown on the clock?



$168 - 134 =$

Monica earned \$20 doing chores. She went to the movies and bought a ticket for \$9 and popcorn for \$7. How much money does Monica have left?

Day 2

Day 4